

NTA CMAT 2019

Application No	000000000000
Candidate Name	000000000000
Roll No.	000000000000
Test Date	28/01/2019
Test Time	9:30 AM - 12:30 PM
Subject	CMAT

Section : Quantitative Techniques and Data Interpretation

Q.1 A management institute has 6 senior professors and 4 junior professors, 3 professors are selected at random for a government project. The probability that at least one of the junior professors would get selected is :

- Options
1. $1/6$
 2. $5/6$
 3. $2/3$
 4. $1/5$

Question Type : MCQ

Question ID : 41652912408

Option 1 ID : 41652948461

Option 2 ID : 41652948458

Option 3 ID : 41652948459

Option 4 ID : 41652948460

Status : Not Answered

Chosen Option : --

Q.2 A rectangular box of width(a), length(b), and height(c) has a solid cylinder of height 'c' and of diameter 'a' placed within it. If $a=6$, $b=8$ and $c=10$, how much volume is left in the rectangular box ?

- Options
1. $240 - 96\pi$
 2. $480 - 90\pi$
 3. $380 - 90\pi$
 4. $480 - 180\pi$

Question Type : MCQ

Question ID : 41652912404

Option 1 ID : 41652948443

Option 2 ID : 41652948444

Option 3 ID : 41652948442

Option 4 ID : 41652948445

Status : Answered

Chosen Option : 2

Q.3 The speeds of 3 cars in the ratio 5 : 4 : 6. The ratio between the time taken by them to travel same distance is :

- Options
1. 15 : 12 : 11
 2. 12 : 10 : 13
 3. 10 : 20 : 30

4. 12 : 15 : 10

Question Type : MCQ

Question ID : 41652912384

Option 1 ID : 41652948364

Option 2 ID : 41652948363

Option 3 ID : 41652948362

Option 4 ID : 41652948365

Status : Answered

Chosen Option : 4

Q.4 The total volume of soaps sold is 680 lakhs units. The volume of Lux sold is 136 lakh units. If the percentage of Lifebuoy sold is 30%, Camay 10%, Liril 15% and Mysore Sandal 10%, answer the following questions.



What is the market share of others in percentage points ?

- Options
1. 16
 2. 13.5
 3. 16.8
 4. 15

Question Type : MCQ

Question ID : 41652912392

Option 1 ID : 41652948395

Option 2 ID : 41652948397

Option 3 ID : 41652948396

Option 4 ID : 41652948394

Status : Answered

Chosen Option : 4

Q.5 Rajesh can check the quality of 1000 items in 5 hours and Rakesh can complete the 75% of same job in 3 hours. How much time is required for both of them to check 1300 items, if Rakesh stops checking after 2 hours ?

- Options
1. 1 hour
 2. 3 hours
 3. 2 hours
 4. 4 hours

Question Type : MCQ

Question ID : 41652912397

Option 1 ID : 41652948417

Option 2 ID : 41652948414

Option 3 ID : 41652948416

Option 4 ID : 41652948415

Status : Answered

Chosen Option : 2

Q.6 In a building there are 30 cylindrical pillars. The radius of each pillar is 35 cm and height is 5 m. Find out the cost of painting the curved surface of half the number of pillars. The rate of painting is Rs. 10 per m².

- Options
1. Rs. 1650
 2. Rs. 16,500
 3. Rs. 4125
 4. Rs. 8250

Question Type : MCQ

Question ID : 41652912399

Option 1 ID : 41652948424

Option 2 ID : 41652948423

Option 3 ID : 41652948425

Option 4 ID : 41652948422

Status : Answered

Chosen Option : 1

Q.7 If $f(x) = x^3 - 4x + p$ and $f(0)$ and $f(1)$ are of opposite signs, then which of the following is necessarily true ?

- Options
1. $-1 < p < 2$
 2. $0 < p < 3$
 3. $-2 < p < 1$
 4. $-3 < p < 0$

Question Type : MCQ

Question ID : 41652912400

Option 1 ID : 41652948426

Option 2 ID : 41652948429

Option 3 ID : 41652948427

Option 4 ID : 41652948428

Status : Answered

Chosen Option : 2

Q.8 Three solid cubes of sides 1 cm, 6 cm and 8 cm are melted to form a new cube. Find the surface area of the cube so formed.

- Options
1. 529 cm
 2. 486 cm
 3. 729 cm
 4. 125 cm

Question Type : MCQ

Question ID : 41652912394

Option 1 ID : 41652948405

Option 2 ID : 41652948403

Option 3 ID : 41652948402

Option 4 ID : 41652948404

Status : Answered

Chosen Option : 2

Q.9

It costs Rs. 6000/- and Rs. 6,100/- respectively to paint the 4 walls of 2 square halls, of the same height. If the length of one hall exceeds the length of the other by 1 m and the cost of painting is Rs. 5 per sq.m., what is the height of the two walls ?

- Options
1. 7.5 m
 2. 5 m
 3. 3 m
 4. 10 m

Question Type : MCQ

Question ID : 41652912386

Option 1 ID : 41652948372

Option 2 ID : 41652948371

Option 3 ID : 41652948370

Option 4 ID : 41652948373

Status : Answered

Chosen Option : 2

Q.10 The angle created by two hands of a clock when the clock shows 5.20 P.M. is :

- Options
1. 35°
 2. 60°
 3. 30°
 4. 40°

Question Type : MCQ

Question ID : 41652912402

Option 1 ID : 41652948435

Option 2 ID : 41652948437

Option 3 ID : 41652948434

Option 4 ID : 41652948436

Status : Answered

Chosen Option : 4

Q.11 The length, breadth and height of a rectangular cuboid are in the ratio 1 : 2 : 3. If the length, breadth and height are increased by 100% each then what would be the increase in the volume of the cuboid ?

- Options
1. 7 times
 2. 8 times
 3. 9 times
 4. 10 times

Question Type : MCQ

Question ID : 41652912403

Option 1 ID : 41652948438

Option 2 ID : 41652948439

Option 3 ID : 41652948440

Option 4 ID : 41652948441

Status : Answered

Chosen Option : 2

Q.12 The sum of three consecutive odd numbers is 20 more than the first number. What is the middle number ?

Options

1. Data inadequate

2. 9

3. 7

4. 11

Question Type : MCQ

Question ID : 41652912395

Option 1 ID : 41652948409

Option 2 ID : 41652948407

Option 3 ID : 41652948406

Option 4 ID : 41652948408

Status : Answered

Chosen Option : 2

Q.13 Students in a commerce class took a test. The average score of men is 70 and of women is 83. The class average is 76. What is the ratio of men to women in the class ?

Options 1. 8 : 7

2. 7 : 8

3. 7 : 6

4. 6 : 7

Question Type : MCQ

Question ID : 41652912405

Option 1 ID : 41652948449

Option 2 ID : 41652948448

Option 3 ID : 41652948447

Option 4 ID : 41652948446

Status : Answered

Chosen Option : 3

Q.14 There are 6 tasks and 6 persons. Tasks cannot be assigned either to person 1 or person 2. task 2 must be assigned to either person 3 or person 4. Every person is to be assigned one task. In how many ways can the assignment be done ?

Options 1. 144

2. 360

3. 192

4. 180

Question Type : MCQ

Question ID : 41652912398

Option 1 ID : 41652948418

Option 2 ID : 41652948421

Option 3 ID : 41652948420

Option 4 ID : 41652948419

Status : Not Answered

Chosen Option : --

Q.15 What is the area covered by a bell-shaped curve from -6 sigma to $+6$ sigma in normal distribution ?

Options 1. 99.73%

2. 99.99%
3. 99.9999%
4. 99.999666%

Question Type : MCQ
Question ID : 41652912401
Option 1 ID : 41652948430
Option 2 ID : 41652948431
Option 3 ID : 41652948432
Option 4 ID : 41652948433
Status : Not Answered
Chosen Option : --

Q.16 If one third of one-fourth of a number is 15, then three-tenth of that number is :

- Options
1. 38
 2. 61
 3. 46
 4. 54

Question Type : MCQ
Question ID : 41652912391
Option 1 ID : 41652948391
Option 2 ID : 41652948393
Option 3 ID : 41652948390
Option 4 ID : 41652948392
Status : Answered
Chosen Option : 4

Q.17 What is the probability of drawing a king or a heart from a deck of cards ?

- Options
1. $1/52$
 2. $4/13$
 3. $17/15$
 4. $1/13$

Question Type : MCQ
Question ID : 41652912387
Option 1 ID : 41652948377
Option 2 ID : 41652948375
Option 3 ID : 41652948376
Option 4 ID : 41652948374
Status : Answered
Chosen Option : 2

Q.18 In a simultaneous throw of a pair of dice, find the probability of getting a total of 9 or more.

- Options
1. $2/7$
 2. $5/12$
 3. $2/36$
 4. $5/18$

Question Type : MCQ

Question ID : 41652912389

Option 1 ID : 41652948385

Option 2 ID : 41652948384

Option 3 ID : 41652948383

Option 4 ID : 41652948382

Status : Answered

Chosen Option : 4

Q.19 The following table lists the marks of seven students(rows) of a class across six subjects(columns). The Numbers in the parenthesis indicate the maximum marks of the subject concerned. Use the data in the table to answer the question that follows :

	English (150)	Hindi (120)	History (100)	Physics (100)	Maths (100)	Chemistry (100)
Maya	90	50	90	60	70	80
Arya	100	80	88	60	80	70
Riya	90	72	70	72	91	70
Sreya	85	65	80	80	60	60
Roopesh	80	55	85	95	50	90
Chandesh	70	75	65	85	40	61
Hanish	65	35	50	77	80	80

Who is the topper of the class ?

- Options
1. Arya
 2. Riya
 3. Roopesh
 4. Maya

Question Type : MCQ

Question ID : 41652912396

Option 1 ID : 41652948411

Option 2 ID : 41652948412

Option 3 ID : 41652948413

Option 4 ID : 41652948410

Status : Answered

Chosen Option : 1

Q.20 What value should come in place of question mark (?) in the following equation ?

$$360\sqrt{?} + 4500 = 19700 - 9800$$

- Options
1. 215
 2. 295
 3. 395
 4. 225

Question Type : MCQ

Question ID : 41652912385

Option 1 ID : 41652948367

Option 2 ID : 41652948368

Option 3 ID : 41652948369

Option 4 ID : 41652948366

Status : Answered

Chosen Option : 4

Q.21 How many minutes does Mr. Surya take to cover a distance of 500 m if he runs at a speed of 25 km/hr ?

- Options
1. 35 sec
 2. 80 sec
 3. 72 sec
 4. 60 sec

Question Type : MCQ
Question ID : 41652912390
Option 1 ID : 41652948387
Option 2 ID : 41652948389
Option 3 ID : 41652948388
Option 4 ID : 41652948386
Status : Answered
Chosen Option : 3

Q.22 The maximum value of $3 \cos x + 4 \sin x + 8$ is :

- Options
1. 7
 2. 15
 3. 3
 4. 13

Question Type : MCQ
Question ID : 41652912393
Option 1 ID : 41652948400
Option 2 ID : 41652948399
Option 3 ID : 41652948398
Option 4 ID : 41652948401
Status : Answered
Chosen Option : 4

Q.23 In a triangle ABC, AD is the bisector of angle A. If AC = 4.2 cm, DC = 6 cm, BC = 10 cm, find AB.

- Options
1. 2.8 cm
 2. 3.4 cm
 3. 2.9 cm
 4. 2.7 cm

Question Type : MCQ
Question ID : 41652912388
Option 1 ID : 41652948379
Option 2 ID : 41652948380
Option 3 ID : 41652948381
Option 4 ID : 41652948378
Status : Answered
Chosen Option : 1

Q.24

The speed of a boat in still water is 5 km/hr. If it takes thrice as much time in going 20 km upstream as in going the same distance downstream, find the speed of the stream.

- Options
1. 3.5 km/hr
 2. 4.5 km/hr
 3. 2.5 km/hr
 4. 5.5 km/hr

Question Type : MCQ

Question ID : 41652912407

Option 1 ID : 41652948455

Option 2 ID : 41652948456

Option 3 ID : 41652948454

Option 4 ID : 41652948457

Status : Answered

Chosen Option : 3

Q.25 Two oranges, three bananas and four apples cost Rs. 15. Three oranges, two bananas and one apple cost Rs. 10. I bought 3 oranges, 3 bananas and 3 apples. How much did I pay ?

- Options
1. Rs. 8
 2. Cannot be determined
 3. Rs. 15
 4. Rs. 10

Question Type : MCQ

Question ID : 41652912406

Option 1 ID : 41652948451

Option 2 ID : 41652948453

Option 3 ID : 41652948452

Option 4 ID : 41652948450

Status : Answered

Chosen Option : 2

Section : Logical Reasoning

Q.1 Direction :

In the following question a statement is given followed by two arguments choose the correct option.

Statement : Should the political parties be banned ?

Argument 1 : Yes, It is necessary to teach a lesson to the politicians

Argument 2 : No, it will lead to an end of democracy

- Options
1. Neither (I), nor (II) is strong
 2. Both the arguments are strong
 3. Only (II) is strong
 4. Only (I) is strong

Question Type : MCQ

Question ID : 41652912427

Option 1 ID : 41652948535

Option 2 ID : 41652948534

Option 3 ID : 41652948537

Option 4 ID : 41652948536

Status : **Answered**
Chosen Option : **3**

Q.2 Which word does not belong with the others ?

- Options
1. Pupil
 2. Cornea
 3. Retina
 4. Vision

Question Type : **MCQ**
Question ID : **41652912433**
Option 1 ID : **41652948561**
Option 2 ID : **41652948559**
Option 3 ID : **41652948560**
Option 4 ID : **41652948558**
Status : **Answered**
Chosen Option : **4**

Q.3 Find the odd one out of given combinations :

- Options
1. TUWY
 2. ABDF
 3. NOQS
 4. GHJM

Question Type : **MCQ**
Question ID : **41652912409**
Option 1 ID : **41652948465**
Option 2 ID : **41652948462**
Option 3 ID : **41652948464**
Option 4 ID : **41652948463**
Status : **Answered**
Chosen Option : **4**

Q.4 Pointing at Ankit, Shruti said, "his father is the only son of my grandfather." How is Ankit related to Shruti ?

- Options
1. Brother
 2. Mother
 3. Sister
 4. Daughter

Question Type : **MCQ**
Question ID : **41652912421**
Option 1 ID : **41652948510**
Option 2 ID : **41652948512**
Option 3 ID : **41652948511**
Option 4 ID : **41652948513**
Status : **Answered**
Chosen Option : **1**

Q.5 In the following question below, 3 statements I, II and III are given. You are required to find out which of the given statement(s) is/are sufficient to answer the question.

How old was Deepa on 30th October 2018 ?

- (I) Deepa is 6 yrs older than her sister Prabha
- (II) Prabha is 29 yrs younger than her mother
- (III) Deepa's mother celebrated her 45th birthday on July 27th 2018

- Options**
1. (II) and (III)
 2. (I) and (III)
 3. (I) and (II)
 4. All (I), (II) and (III)

Question Type : **MCQ**
Question ID : **41652912413**
Option 1 ID : **41652948480**
Option 2 ID : **41652948481**
Option 3 ID : **41652948478**
Option 4 ID : **41652948479**
Status : **Answered**
Chosen Option : 4

Q.6 In a certain code RIPPLE is written as 613382 and LIFE is written as 8192. How is PILLER written in that code ?

- Options**
1. 318826
 2. 312688
 3. 318286
 4. 618826

Question Type : **MCQ**
Question ID : **41652912415**
Option 1 ID : **41652948486**
Option 2 ID : **41652948489**
Option 3 ID : **41652948487**
Option 4 ID : **41652948488**
Status : **Answered**
Chosen Option : 1

Q.7 Choose the necessary for the given word.
"Swimming"

- Options**
1. Suit
 2. Pool
 3. Life jacket
 4. Water

Question Type : **MCQ**
Question ID : **41652912420**
Option 1 ID : **41652948507**
Option 2 ID : **41652948506**
Option 3 ID : **41652948509**
Option 4 ID : **41652948508**
Status : **Answered**
Chosen Option : 4

Q.8 In some way 123 means "he is talented", 3456 means "talented people earn more", 45678 means "people earn more to enjoy". Then what is equal to "earn" ?

- Options
1. 5
 2. 7
 3. 4
 4. 6

Question Type : **MCQ**
Question ID : **41652912410**
Option 1 ID : **41652948467**
Option 2 ID : **41652948469**
Option 3 ID : **41652948466**
Option 4 ID : **41652948468**
Status : **Answered**
Chosen Option : **1**

Q.9 Direction :
In the following question a statement is given followed by two conclusions. Choose the correct option.

Statement :

Any student who follow un-ethical practices in examination disqualifies himself from examinations

Conclusion :

- (I) Those who involve in un-ethical practices in examination shall be debarred
- (II) Examination system should be improved

- Options
1. Only Conclusion (I) follows
 2. Neither Conclusion (I) or (II) follows
 3. Only Conclusion (II) follows
 4. Both Conclusion (I) and (II) follow

Question Type : **MCQ**
Question ID : **41652912426**
Option 1 ID : **41652948530**
Option 2 ID : **41652948532**
Option 3 ID : **41652948531**
Option 4 ID : **41652948533**
Status : **Answered**
Chosen Option : **1**

Q.10 If JAPAN is coded KCSES, then the code of CASTLE will be _____.

- Options
1. DKMSGR
 2. DCVXQK
 3. DJKRDP
 4. DIJOBT

Question Type : **MCQ**
Question ID : **41652912414**
Option 1 ID : **41652948484**
Option 2 ID : **41652948485**
Option 3 ID : **41652948483**

Option 4 ID : 41652948482
Status : Answered
Chosen Option : 2

Q.11 In analogy, you are required to guess the relation between the two given words and fill in the blank after finding the similar relationship by choosing any word from the options given below :

Hen : Chick :: Frog : _____

- Options
1. Tadpole
 2. Fawn
 3. Kitten
 4. Puppy

Question Type : MCQ
Question ID : 41652912417
Option 1 ID : 41652948495
Option 2 ID : 41652948497
Option 3 ID : 41652948494
Option 4 ID : 41652948496
Status : Answered
Chosen Option : 1

Q.12 Find the missing number in the series below :

24, 28, 30, 34, _____

- Options
1. 35
 2. 36
 3. 40
 4. 38

Question Type : MCQ
Question ID : 41652912411
Option 1 ID : 41652948472
Option 2 ID : 41652948470
Option 3 ID : 41652948473
Option 4 ID : 41652948471
Status : Answered
Chosen Option : 2

Q.13 In the following question, the main statement is followed by four sentences. Select the pair of sentences that relate logically to the given statement.

Either the employees have no confidence in the management or they are hostile by nature.

- A. They are hostile by nature
- B. They are not hostile by nature
- C. They have confidence in the management
- D. They have no confidence in the management

- Options
1. DA
 2. BA
 3. CB
 4. BD

Question Type : MCQ

Question ID : 41652912425

Option 1 ID : 41652948528

Option 2 ID : 41652948526

Option 3 ID : 41652948527

Option 4 ID : 41652948529

Status : Answered

Chosen Option : 1

Q.14 Akshay and Ajay are friends studying in same class. Ajay could not score as much marks as Akshay scored and hence Ajay's father took Ajay into task. Ajay replied that there are so many like me in the class. Based on the information findout the answer to the question : Akshay ranks 13th in the class where 33 students are studying. There are 5 students below Ajay rankwise.

How many students are there between Akshay and Ajay ?

- Options
1. 15
 2. 16
 3. 14
 4. 12

Question Type : MCQ

Question ID : 41652912423

Option 1 ID : 41652948519

Option 2 ID : 41652948518

Option 3 ID : 41652948520

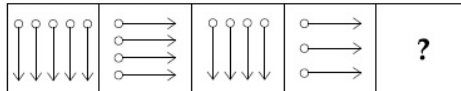
Option 4 ID : 41652948521

Status : Answered

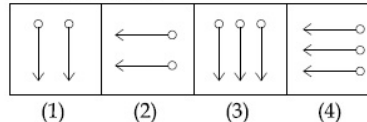
Chosen Option : 4

Q.15 In the following question, a group of four figures following certain sequence is given as problem figures. Problem figures are followed by another group of four figures known as answer figures marked (1), (2), (3), (4). Find out the figure from the answer figures which when placed next to the problem figures will continue the sequence of the problem figures.

Problem figure :



Answer figure :



- Options
1. (3)
 2. (4)
 3. (1)
 4. (2)

Question Type : MCQ

Question ID : 41652912429

Option 1 ID : 41652948544

Option 2 ID : 41652948545

Option 3 ID : 41652948542

Option 4 ID : 41652948543

Status : Answered

Chosen Option : 1

Q.16 Which word doesnot belong with the others ?

- Options
1. Flute

2. Cello
3. Guitar
4. Violin

Question Type : MCQ
Question ID : 41652912419
Option 1 ID : 41652948503
Option 2 ID : 41652948505
Option 3 ID : 41652948502
Option 4 ID : 41652948504
Status : Answered
Chosen Option : 2

Q.17 Read the following information carefully to answer the questions given below it.

- (a) 'A + B' means that 'A' is the father of 'B'
- (b) 'A - B' means that 'A' is the wife of 'B'
- (c) 'A × B' means that 'A' is the brother of 'B'
- (d) 'A ÷ B' means that 'A' is the daughter of 'B'

If it is given 'P ÷ R + S + Q', then which of the following is true ?

- Options
1. Q is the aunt of P
 2. P is the aunt of Q
 3. P is the mother of Q
 4. P is the daughter of Q

Question Type : MCQ
Question ID : 41652912428
Option 1 ID : 41652948540
Option 2 ID : 41652948539
Option 3 ID : 41652948541
Option 4 ID : 41652948538
Status : Answered
Chosen Option : 2

Q.18 Vasishtha started walking positioning his back towards the sun. After sometime, Vasishtha turned left, the turned right, and then towards left again. Which is the direction Vasishtha is going now ?

- Options
1. North or West
 2. North or South
 3. South or West
 4. East or West

Question Type : MCQ
Question ID : 41652912432
Option 1 ID : 41652948556
Option 2 ID : 41652948554
Option 3 ID : 41652948557
Option 4 ID : 41652948555
Status : Answered
Chosen Option : 2

Q.19

For the Assertion (A) and Reason (R) given below choose the correct alternative from the following :

(A) : Copper is used to make electric wire

(R) : Copper has very low electric resistance

Options

1. (A) is true, (R) is false
2. (A) is false, (R) is true
3. Both (A) and (R) are true and (R) is not the correct explanation of (A)
4. Both (A) and (R) are true and (R) is the correct explanation of (A)

Question Type : MCQ

Question ID : 41652912412

Option 1 ID : 41652948476

Option 2 ID : 41652948477

Option 3 ID : 41652948475

Option 4 ID : 41652948474

Status : Answered

Chosen Option : 4

Q.20 In the given figure, if the centres of all the circles are joined by horizontal and vertical lines, then find the number of squares that can be formed.



Options

1. 1
2. 6
3. 8
4. 7

Question Type : MCQ

Question ID : 41652912430

Option 1 ID : 41652948549

Option 2 ID : 41652948546

Option 3 ID : 41652948548

Option 4 ID : 41652948547

Status : Answered

Chosen Option : 3

Q.21 There are four Trees - Lemon, Coconut, Mango and Neem each at a different corner of a rectangular plot. A well is located at one corner and a cabin at another corner. Lemon and Coconut trees are on either side of the gate, which is located at the centre of side, opposite to the side, extremes of which the well and cabin are located. The mango tree is not at the corner where the cabin is located.

Which of the following pairs can be diagonally opposite to each other in the plot ?

Options

1. Mango tree and Well
2. Cabin and Neem tree
3. Neem tree and Lemon tree
4. Coconut tree and Lemon tree

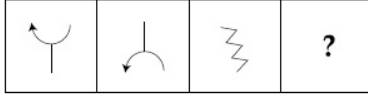
Question Type : MCQ

Question ID : 41652912431

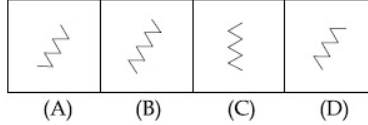
Option 1 ID : 41652948552
 Option 2 ID : 41652948551
 Option 3 ID : 41652948550
 Option 4 ID : 41652948553
 Status : Answered
 Chosen Option : 3

Q.22 Select the suitable figure from the answer figures that would replace the question mark (?).

Problem figure :



Answer figure :



- Options
1. A
 2. B
 3. D
 4. C

Question Type : MCQ
 Question ID : 41652912422
 Option 1 ID : 41652948514
 Option 2 ID : 41652948515
 Option 3 ID : 41652948517
 Option 4 ID : 41652948516
 Status : Answered
 Chosen Option : 1

Q.23 If X is the brother of Y and P, Z is the mother of Y and Q is the father of X, which one of the following statement is not definitely true ?

- Options
1. Y is the brother of P
 2. Z is the wife of Q
 3. X is the son of Z
 4. X is the father of P

Question Type : MCQ
 Question ID : 41652912416
 Option 1 ID : 41652948490
 Option 2 ID : 41652948492
 Option 3 ID : 41652948491
 Option 4 ID : 41652948493
 Status : Answered
 Chosen Option : 4

Q.24 In analogy, you are required to guess the function relation between the two given words and find the similar relation between the words given in any of the option.

CUP : LIP :: BIRD : _____

- Options
1. FOREST
 2. GRASS
 3. BUSH
 4. BEAK

Question Type : MCQ
Question ID : 41652912418
Option 1 ID : 41652948500
Option 2 ID : 41652948501
Option 3 ID : 41652948498
Option 4 ID : 41652948499
Status : Answered
Chosen Option : 4

Q.25 The missing term in the series 2, 1, $1/2$, $1/4$, _____ is

- Options
1. $1/16$
 2. $1/8$
 3. $1/3$
 4. $2/8$

Question Type : MCQ
Question ID : 41652912424
Option 1 ID : 41652948525
Option 2 ID : 41652948523
Option 3 ID : 41652948522
Option 4 ID : 41652948524
Status : Answered
Chosen Option : 2

Section : English Language Comprehension

Comprehension:

Read the following passage and answer the question that follows :

An endangered language is one that is likely to become extinct in the near future. Many languages are falling out of use and being replaced by others that are more widely used in the region or nation, such as English in the U.S. or Spanish in Mexico. Unless current trends are reversed, these endangered languages will become extinct within the next century. Many other languages are no longer being learned by new generations of children or by new adult speakers ; these languages will become extinct when their last speaker dies. Infact, dozens of languages today have only one native speaker still living, and that person's death will mean the extinction of the language : It will no longer be spoken, or known, by anyone.

Ancient Greek and Latin languages are considered dead because they are no longer spoken in the form in which we find them in ancient writings. But they weren't abruptly replaced by other languages ; instead, Ancient Greek slowly evolved into modern Greek, and Latin slowly evolved into modern Italian, Spanish, French, Romanian, and other languages. In the same way, the Middle English of Chaucer's day is no longer spoken, but it has evolved into Modern English.

SubQuestion No : 1

Q.1 Spanish language evolved out of :

- Options
1. Latin
 2. Greek
 3. English
 4. French

Question Type : MCQ
Question ID : 41652912437
Option 1 ID : 41652948572
Option 2 ID : 41652948571
Option 3 ID : 41652948570
Option 4 ID : 41652948573

Status : **Answered**
Chosen Option : 1

Comprehension:

Read the following passage and answer the question that follows :

An endangered language is one that is likely to become extinct in the near future. Many languages are falling out of use and being replaced by others that are more widely used in the region or nation, such as English in the U.S. or Spanish in Mexico. Unless current trends are reversed, these endangered languages will become extinct within the next century. Many other languages are no longer being learned by new generations of children or by new adult speakers ; these languages will become extinct when their last speaker dies. Infact, dozens of languages today have only one native speaker still living, and that person's death will mean the extinction of the language : It will no longer be spoken, or known, by anyone.

Ancient Greek and Latin languages are considered dead because they are no longer spoken in the form in which we find them in ancient writings. But they weren't abruptly replaced by other languages ; instead, Ancient Greek slowly evolved into modern Greek, and Latin slowly evolved into modern Italian, Spanish, French, Romanian, and other languages. In the same way, the Middle English of Chaucer's day is no longer spoken, but it has evolved into Modern English.

SubQuestion No : 2

Q.2 "These languages will become extinct"

In the above sentence "these" refers to :

- Options
1. Other languages
 2. Endangered languages
 3. Spanish in Mexico
 4. Middle English

Question Type : **MCQ**
Question ID : **41652912436**
Option 1 ID : **41652948569**
Option 2 ID : **41652948567**
Option 3 ID : **41652948566**
Option 4 ID : **41652948568**
Status : **Answered**
Chosen Option : 2

Comprehension:

Read the following passage and answer the question that follows :

An endangered language is one that is likely to become extinct in the near future. Many languages are falling out of use and being replaced by others that are more widely used in the region or nation, such as English in the U.S. or Spanish in Mexico. Unless current trends are reversed, these endangered languages will become extinct within the next century. Many other languages are no longer being learned by new generations of children or by new adult speakers ; these languages will become extinct when their last speaker dies. Infact, dozens of languages today have only one native speaker still living, and that person's death will mean the extinction of the language : It will no longer be spoken, or known, by anyone.

Ancient Greek and Latin languages are considered dead because they are no longer spoken in the form in which we find them in ancient writings. But they weren't abruptly replaced by other languages ; instead, Ancient Greek slowly evolved into modern Greek, and Latin slowly evolved into modern Italian, Spanish, French, Romanian, and other languages. In the same way, the Middle English of Chaucer's day is no longer spoken, but it has evolved into Modern English.

SubQuestion No : 3

Q.3 What is endangered language ?

- Options
1. The language that is not spoken by anyone at all
 2. The language that is spoken by many people

3. A language that is most likely to expand in the near future
4. A language that is most likely to die in the near future

Question Type : **MCQ**
 Question ID : **41652912435**
 Option 1 ID : **41652948563**
 Option 2 ID : **41652948562**
 Option 3 ID : **41652948565**
 Option 4 ID : **41652948564**
 Status : **Answered**
 Chosen Option : **4**

Comprehension:

Read the following passage and answer the question that follows.

There are no World Trade Organisation (WTO) definitions of “developed” and “developing” countries. Members announce for themselves whether they are “developed” or “developing” countries. However, other members can challenge the decision of a member to make use of provisions available to developing countries.

Developing country status in the WTO brings certain rights. There are for example provisions in some WTO Agreements which provide developing countries with longer transaction periods before they are required to fully implement the agreement and developing countries can receive technical assistance.

That a WTO member announces itself as a developing country does not automatically mean that it will benefit from the unilateral preference schemes of some of the developed country members such as the Generalized System of Preferences (GSP). In practice, it is the preference giving country which decides the list of developing countries.

SubQuestion No : 4

Q.4 Who decides whether one country is developing or developed ?

- Options
1. The neighbouring countries
 2. The World Trade Organization
 3. The country itself
 4. The preference giving country

Question Type : **MCQ**
 Question ID : **41652912439**
 Option 1 ID : **41652948575**
 Option 2 ID : **41652948574**
 Option 3 ID : **41652948576**
 Option 4 ID : **41652948577**
 Status : **Answered**
 Chosen Option : **3**

Comprehension:

Read the following passage and answer the question that follows.

There are no World Trade Organisation (WTO) definitions of “developed” and “developing” countries. Members announce for themselves whether they are “developed” or “developing” countries. However, other members can challenge the decision of a member to make use of provisions available to developing countries.

Developing country status in the WTO brings certain rights. There are for example provisions in some WTO Agreements which provide developing countries with longer transaction periods before they are required to fully implement the agreement and developing countries can receive technical assistance.

That a WTO member announces itself as a developing country does not automatically mean that it will benefit from the unilateral preference schemes of some of the developed country members such as the Generalized System of Preferences (GSP). In practice, it is the preference giving country which decides the list of developing countries.

SubQuestion No : 5

Q.5 Why would a country likes to announce itself as a developing country ?

- Options
1. So that it need implement WTO agreements
 2. So that it can become member of WTO
 3. So that it can become the preference giving country
 4. So that it gets some relaxation of time in implemenation WTO agreements

Question Type : MCQ
Question ID : 41652912441
Option 1 ID : 41652948583
Option 2 ID : 41652948582
Option 3 ID : 41652948585
Option 4 ID : 41652948584
Status : Answered
Chosen Option : 4

Comprehension:

Read the following passage and answer the question that follows.

There are no World Trade Organisation (WTO) definitions of "developed" and "developing" countries. Members announce for themselves whether they are "developed" or "developing" countries. However, other members can challenge the decision of a member to make use of provisions available to developing countries.

Developing country status in the WTO brings certain rights. There are for example provisions in some WTO Agreements which provide developing countries with longer transaction periods before they are required to fully implement the agreement and developing countries can receive technical assistance.

That a WTO member announces itself as a developing country does not automatically mean that it will benefit from the unilateral preference schemes of some of the developed country members such as the Generalized System of Preferences (GSP). In practice, it is the preference giving country which decides the list of developing countries.

SubQuestion No : 6

- Q.6** Who can change the decision of a country to make use of provisions available to developing countries ?

- Options
1. The preference giving country
 2. The World Trade Organization
 3. Any neighbouring country
 4. Any member country of WTO

Question Type : MCQ
Question ID : 41652912440
Option 1 ID : 41652948581
Option 2 ID : 41652948578
Option 3 ID : 41652948579
Option 4 ID : 41652948580
Status : Answered
Chosen Option : 4

Comprehension:

Read the following passage and answer the question that follows.

When a child is born, her first connection to the world is established through her mother, or in a broader sense, her parents. An infant sees the world through her parent's eyes ; she tries to imbibe everything she recognises in her parents. Thus, a parent-child relationship lays the foundation of the '*building of her life*'. Parenting is the bringing up of a child. It is like the nourishment that is necessary for a sapling to grow into a big and fruitful tree. Hence, for a child to grow into a wonderful human being, good parenting is essential.

Parenting styles vary from culture to culture. The world is a big place comprising of a variety of people having different ways of living. Although culture is the key ingredient, the economic situation and standard of living also have an impact on parenting. While there are a common set of values in different cultures like honesty and integrity, the value system stands divided on some of the major facets of parenting, exemplified by the comparison of the Indian style with that of the West.

SubQuestion No : 7

Q.7 Parenting here is compared to :

- Options
1. Looking after a pet
 2. Maintaining a vehicle
 3. Maintaining a relationship
 4. Nourishing a plant

Question Type : MCQ

Question ID : 41652912445

Option 1 ID : 41652948595

Option 2 ID : 41652948596

Option 3 ID : 41652948597

Option 4 ID : 41652948594

Status : Answered

Chosen Option : 4

Comprehension:

Read the following passage and answer the question that follows.

When a child is born, her first connection to the world is established through her mother, or in a broader sense, her parents. An infant sees the world through her parent's eyes ; she tries to imbibe everything she recognises in her parents. Thus, a parent-child relationship lays the foundation of the '*building of her life*'. Parenting is the bringing up of a child. It is like the nourishment that is necessary for a sapling to grow into a big and fruitful tree. Hence, for a child to grow into a wonderful human being, good parenting is essential.

Parenting styles vary from culture to culture. The world is a big place comprising of a variety of people having different ways of living. Although culture is the key ingredient, the economic situation and standard of living also have an impact on parenting. While there are a common set of values in different cultures like honesty and integrity, the value system stands divided on some of the major facets of parenting, exemplified by the comparison of the Indian style with that of the West.

SubQuestion No : 8

Q.8 Parenting is basically :

- Options
1. Culture independent
 2. Common across all cultures
 3. Culture dependent
 4. Country independent

Question Type : MCQ

Question ID : 41652912444

Option 1 ID : 41652948591

Option 2 ID : 41652948593

Option 3 ID : 41652948590

Option 4 ID : 41652948592

Status : Answered

Chosen Option : 3

Comprehension:

Read the following passage and answer the question that follows.

When a child is born, her first connection to the world is established through her mother, or in a broader sense, her parents. An infant sees the world through her parent's eyes ; she tries to imbibe everything she recognises in her parents. Thus, a parent-child relationship lays the foundation of the '*building of her life*'. Parenting is the bringing up of a child. It is like the nourishment that is necessary for a sapling to grow into a big and fruitful tree. Hence, for a child to grow into a wonderful human being, good parenting is essential.

Parenting styles vary from culture to culture. The world is a big place comprising of a variety of people having different ways of living. Although culture is the key ingredient, the economic situation and standard of living also have an impact on parenting. While there are a common set of values in different cultures like honesty and integrity, the value system stands divided on some of the major facets of parenting, exemplified by the comparison of the Indian style with that of the West.

SubQuestion No : 9

Q.9 Which of the following is a major differentiator on some of the major facets of parenting ?

- Options
1. Value system
 2. Intregrity
 3. Honesty
 4. Love

Question Type : MCQ

Question ID : 41652912443

Option 1 ID : 41652948589

Option 2 ID : 41652948587

Option 3 ID : 41652948586

Option 4 ID : 41652948588

Status : Answered

Chosen Option : 1

Comprehension:

Read the following passage and answer the question that follows.

Steve Jobs was an enigma. He was quirky. I would like to share a few little known facts about the man who pretty much changed the world with one small technological device.

Steve Jobs liked to work bare foot (even while in corporate environments and during million dollar negotiations). He was vegan and often went on diets where he would only eat orange things. He was a Zen Buddhist and extensively travelled India during his youth. He was such a perfectionist that there was a period when he had no furniture in his house at all, because he could not decide what to buy. He used to read his favourite book of all time, every single year '*Autobiography of a yogi*', by Paramhansa Yogananda. This man was not afraid to be himself. "Remembering that I'll be dead soon, is the most important tool, I've ever encountered to help me make the big choices in life. Almost everything ... all external expectations, all pride, all fear of embarrassment or failure ... these things just fall away in the face of death, leaving only what is truly important."

Jobs, used to say "Remembering that you are going to die is the best way I know to avoid the trap of thinking you have something to lose. You are already naked. There is no reason, not to follow your heart. No one wants to die. Even people who want to go to heaven, do not want to die to get there. And yet, death is the destination, we all share. No one has ever escaped it, and that is how it should be, because death is very likely the single best invention of life. It is life's change agent. It clears out the old to make way for the new."

SubQuestion No : 10

Q.10 "Remembering that you are going to die, is the best way I know" I in this line is :

- Options
1. The author of the article
 2. Steve Jobs
 3. Any manager
 4. The narrator in the article

Question Type : MCQ

Question ID : 41652912449

Option 1 ID : 41652948606

Option 2 ID : 41652948608

Option 3 ID : 41652948609

Option 4 ID : 41652948607

Status : Answered

Chosen Option : 2

Comprehension:

Read the following passage and answer the question that follows.

Steve Jobs was an enigma. He was quirky. I would like to share a few little known facts about the man who pretty much changed the world with one small technological device.

Steve Jobs liked to work bare foot (even while in corporate environments and during million dollar negotiations). He was vegan and often went on diets where he would only eat orange things. He was a Zen Buddhist and extensively travelled India during his youth. He was such a perfectionist that there was a period when he had no furniture in his house at all, because he could not decide what to buy. He used to read his favourite book of all time, every single year 'Autobiography of a yogi', by Paramhansa Yogananda. This man was not afraid to be himself. "Remembering that I'll be dead soon, is the most important tool, I've ever encountered to help me make the big choices in life. Almost everything ... all external expectations, all pride, all fear of embarrassment or failure ... these things just fall away in the face of death, leaving only what is truly important."

Jobs, used to say "Remembering that you are going to die is the best way I know to avoid the trap of thinking you have something to lose. You are already naked. There is no reason, not to follow your heart. No one wants to die. Even people who wants to go to heaven, do not want to die to get there. And yet, death is the destination, we all share. No one has ever escaped it, and that is how it should be, because death is very likely the single best invention of life. It is life's change agent. It clears out the old to make way for the new."

SubQuestion No : 11

Q.11 This passage tells us :

- Options
1. Steve Job's life story.
 2. Steve Job's business management skills.
 3. Some not very well known facts.
 4. Very well known facts about Steve Jobs.

Question Type : MCQ

Question ID : 41652912452

Option 1 ID : 41652948620

Option 2 ID : 41652948621

Option 3 ID : 41652948619

Option 4 ID : 41652948618

Status : Answered

Chosen Option : 3

Comprehension:

Read the following passage and answer the question that follows.

Steve Jobs was an enigma. He was quirky. I would like to share a few little known facts about the man who pretty much changed the world with one small technological device.

Steve Jobs liked to work bare foot (even while in corporate environments and during million dollar negotiations). He was vegan and often went on diets where he would only eat orange things. He was a Zen Buddhist and extensively travelled India during his youth. He was such a perfectionist that there was a period when he had no furniture in his house at all, because he could not decide what to buy. He used to read his favourite book of all time, every single year 'Autobiography of a yogi', by Paramhansa Yogananda. This man was not afraid to be himself. "Remembering that I'll be dead soon, is the most important tool, I've ever encountered to help me make the big choices in life. Almost everything ... all external expectations, all pride, all fear of embarrassment or failure ... these things just fall away in the face of death, leaving only what is truly important."

Jobs, used to say "Remembering that you are going to die is the best way I know to avoid the trap of thinking you have something to lose. You are already naked. There is no reason, not to follow your heart. No one wants to die. Even people who wants to go to heaven, do not want to die to get there. And yet, death is the destination, we all share. No one has ever escaped it, and that is how it should be, because death is very likely the single best invention of life. It is life's change agent. It clears out the old to make way for the new."

SubQuestion No : 12

Q.12 In the passage which one of the following is not true ?

- Options
1. Death is the single best invention
 2. Look for death
 3. No one escapes the death
 4. Death is the destination

Question Type : MCQ

Question ID : 41652912450

Option 1 ID : 41652948612

Option 2 ID : 41652948613

Option 3 ID : 41652948611

Option 4 ID : 41652948610

Status : Answered

Chosen Option : 2

Comprehension:

Read the following passage and answer the question that follows.

Steve Jobs was an enigma. He was quirky. I would like to share a few little known facts about the man who pretty much changed the world with one small technological device.

Steve Jobs liked to work bare foot (even while in corporate environments and during million dollar negotiations). He was vegan and often went on diets where he would only eat orange things. He was a Zen Buddhist and extensively travelled India during his youth. He was such a perfectionist that there was a period when he had no furniture in his house at all, because he could not decide what to buy. He used to read his favourite book of all time, every single year 'Autobiography of a yogi', by Paramhansa Yogananda. This man was not afraid to be himself. "Remembering that I'll be dead soon, is the most important tool, I've ever encountered to help me make the big choices in life. Almost everything ... all external expectations, all pride, all fear of embarrassment or failure ... these things just fall away in the face of death, leaving only what is truly important."

Jobs, used to say "Remembering that you are going to die is the best way I know to avoid the trap of thinking you have something to lose. You are already naked. There is no reason, not to follow your heart. No one wants to die. Even people who want to go to heaven, do not want to die to get there. And yet, death is the destination, we all share. No one has ever escaped it, and that is how it should be, because death is very likely the single best invention of life. It is life's change agent. It clears out the old to make way for the new."

SubQuestion No : 13

Q.13 Which of the following statement is false ?

Steve Jobs had no furniture at his house because :

- Options
1. He was a perfectionist
 2. He wanted to buy the perfect furniture
 3. He could not decide what to buy
 4. He had no money

Question Type : MCQ

Question ID : 41652912451

Option 1 ID : 41652948615

Option 2 ID : 41652948617

Option 3 ID : 41652948616

Option 4 ID : 41652948614

Status : Answered

Chosen Option : 4

Comprehension:

Read the following passage and answer the question that follows.

Steve Jobs was an enigma. He was quirky. I would like to share a few little known facts about the man who pretty much changed the world with one small technological device.

Steve Jobs liked to work bare foot (even while in corporate environments and during million dollar negotiations). He was vegan and often went on diets where he would only eat orange things. He was a Zen Buddhist and extensively travelled India during his youth. He was such a perfectionist that there was a period when he had no furniture in his house at all, because he could not decide what to buy. He used to read his favourite book of all time, every single year 'Autobiography of a yogi', by Paramhansa Yogananda. This man was not afraid to be himself. "Remembering that I'll be dead soon, is the most important tool, I've ever encountered to help me make the big choices in life. Almost everything ... all external expectations, all pride, all fear of embarrassment or failure ... these things just fall away in the face of death, leaving only what is truly important."

Jobs, used to say "Remembering that you are going to die is the best way I know to avoid the trap of thinking you have something to lose. You are already naked. There is no reason, not to follow your heart. No one wants to die. Even people who wants to go to heaven, do not want to die to get there. And yet, death is the destination, we all share. No one has ever escaped it, and that is how it should be, because death is very likely the single best invention of life. It is life's change agent. It clears out the old to make way for the new."

SubQuestion No : 14

Q.14 Steve Jobs believed in :

- Options
1. Altruism
 2. Perfectionism
 3. Materialism
 4. Normatism

Question Type : MCQ

Question ID : 41652912448

Option 1 ID : 41652948605

Option 2 ID : 41652948603

Option 3 ID : 41652948602

Option 4 ID : 41652948604

Status : Answered

Chosen Option : 2

Comprehension:

Read the following passage and answer the question that follows.

Steve Jobs was an enigma. He was quirky. I would like to share a few little known facts about the man who pretty much changed the world with one small technological device.

Steve Jobs liked to work bare foot (even while in corporate environments and during million dollar negotiations). He was vegan and often went on diets where he would only eat orange things. He was a Zen Buddhist and extensively travelled India during his youth. He was such a perfectionist that there was a period when he had no furniture in his house at all, because he could not decide what to buy. He used to read his favourite book of all time, every single year 'Autobiography of a yogi', by Paramhansa Yogananda. This man was not afraid to be himself. "Remembering that I'll be dead soon, is the most important tool, I've ever encountered to help me make the big choices in life. Almost everything ... all external expectations, all pride, all fear of embarrassment or failure ... these things just fall away in the face of death, leaving only what is truly important."

Jobs, used to say "Remembering that you are going to die is the best way I know to avoid the trap of thinking you have something to lose. You are already naked. There is no reason, not to follow your heart. No one wants to die. Even people who wants to go to heaven, do not want to die to get there. And yet, death is the destination, we all share. No one has ever escaped it, and that is how it should be, because death is very likely the single best invention of life. It is life's change agent. It clears out the old to make way for the new."

SubQuestion No : 15

Q.15 The passage is written in :

- Options
1. Third person narrative
 2. Multiple person narrative
 3. Second person narrative
 4. First person narrative

Question Type : **MCQ**
Question ID : **41652912447**
Option 1 ID : **41652948599**
Option 2 ID : **41652948600**
Option 3 ID : **41652948601**
Option 4 ID : **41652948598**
Status : **Answered**
Chosen Option : **1**

Q.16 Select the grammatically correct sentence from the following :
Statements :

Options

1. Although he failed in that Mathematics, but he received a degree in Engineering.
2. Although he had failed in Mathematics, he received a degree in Engineering.
3. Although he had failed in Mathematics, that he received a degree in Engineering.
4. Although that he failed in Mathematics, but he received a degree in Engineering.

Question Type : **MCQ**
Question ID : **41652912459**
Option 1 ID : **41652948649**
Option 2 ID : **41652948648**
Option 3 ID : **41652948647**
Option 4 ID : **41652948646**
Status : **Answered**
Chosen Option : **2**

Q.17 Choose the closest meaning of the proverb/idiom :
To leave someone in the lurch.

- Options**
1. To leave someone to his/her fate
 2. To make someone comfortable
 3. To help someone in difficulties
 4. To respect someone

Question Type : **MCQ**
Question ID : **41652912456**
Option 1 ID : **41652948636**
Option 2 ID : **41652948635**
Option 3 ID : **41652948637**
Option 4 ID : **41652948634**
Status : **Answered**
Chosen Option : **1**

Q.18 A prima facie case is :

- Options**
1. As it seems to the court after a number of hearings
 2. As it turns out to be at the end
 3. As it seems at first sight

4. As it is made to seem at first sight

Question Type : MCQ
 Question ID : 41652912462
 Option 1 ID : 41652948661
 Option 2 ID : 41652948660
 Option 3 ID : 41652948658
 Option 4 ID : 41652948659
 Status : Answered
 Chosen Option : 4

Q.19 The following sentence is underlined and marked as section A, B, C and D. Show which section contains an error.

As John had taken (A) only a few sips of tea, (B) there was still little tea (C) left in the cup (D)

- Options
1. (C)
 2. (B)
 3. (D)
 4. (A)

Question Type : MCQ
 Question ID : 41652912460
 Option 1 ID : 41652948652
 Option 2 ID : 41652948651
 Option 3 ID : 41652948653
 Option 4 ID : 41652948650
 Status : Answered
 Chosen Option : 2

Q.20 The following are jumbled up parts of a sentence. Rearrange them in a proper sequence :

- P : did he realize
 Q : helped by a man
 R : that he had been
 S : he never respected

- Options
1. SRQP
 2. QRPS
 3. PRQS
 4. PQRS

Question Type : MCQ
 Question ID : 41652912455
 Option 1 ID : 41652948630
 Option 2 ID : 41652948631
 Option 3 ID : 41652948633
 Option 4 ID : 41652948632
 Status : Answered
 Chosen Option : 3

Q.21 From the options given below choose the correct substitute for the underlined word :

Democracy is of the people, by the people and for the people. However, a government run by a few is dangerous for a republic like India.

- Options
1. Aristocracy

2. Autocracy
3. Oligarchy
4. Monarchy

Question Type : MCQ
Question ID : 41652912457
Option 1 ID : 41652948640
Option 2 ID : 41652948638
Option 3 ID : 41652948641
Option 4 ID : 41652948639
Status : Answered
Chosen Option : 4

Q.22 Choose the correct part of words to fill in the blanks.

The instructor asked the students to work _____ the given sum in the note book and hand it _____ to him for correction.

- Options
1. out, away
 2. on, over
 3. out, over
 4. away, in

Question Type : MCQ
Question ID : 41652912458
Option 1 ID : 41652948643
Option 2 ID : 41652948644
Option 3 ID : 41652948642
Option 4 ID : 41652948645
Status : Answered
Chosen Option : 2

Q.23 In the following sentence, what does the underlined phrase mean ?

A good teacher is one who sees to it that a student does not waste time in reinventing the wheel.

- Options
1. waste time in imaginary things
 2. doing something that has already been done
 3. repeating oneself
 4. waste time on unnecessary details

Question Type : MCQ
Question ID : 41652912461
Option 1 ID : 41652948657
Option 2 ID : 41652948656
Option 3 ID : 41652948654
Option 4 ID : 41652948655
Status : Answered
Chosen Option : 2

Q.24 Choose the word that is closest in meaning to the word :

ABRIDGE

Options

1. Understand
2. Shorten
3. Join
4. To fill the gap

Question Type : MCQ
Question ID : 41652912454
Option 1 ID : 41652948629
Option 2 ID : 41652948628
Option 3 ID : 41652948627
Option 4 ID : 41652948626
Status : Answered
Chosen Option : 4

**Q.25 Choose the correct word that is opposite in meaning to the word :
PACIFY**

- Options
1. Encourage
 2. Aggravate
 3. Discourage
 4. Slow down

Question Type : MCQ
Question ID : 41652912453
Option 1 ID : 41652948623
Option 2 ID : 41652948624
Option 3 ID : 41652948625
Option 4 ID : 41652948622
Status : Answered
Chosen Option : 1

Section : General Awareness

Q.1 Debenture holders of a company are its :

- Options
1. Debtors
 2. Share holders
 3. Directors
 4. Creditors

Question Type : MCQ
Question ID : 41652912465
Option 1 ID : 41652948671
Option 2 ID : 41652948670
Option 3 ID : 41652948673
Option 4 ID : 41652948672
Status : Not Answered
Chosen Option : --

Q.2

Which country has secured member one spot in the latest FIFA's world rankings released on 25th Oct, 2018 ?

- Options
1. Argentina
 2. Belgium
 3. France
 4. Brazil

Question Type : MCQ

Question ID : 41652912469

Option 1 ID : 41652948689

Option 2 ID : 41652948687

Option 3 ID : 41652948686

Option 4 ID : 41652948688

Status : Not Answered

Chosen Option : --

Q.3 Which one of the following is credit rating agencies in India ?

- Options
1. MIX
 2. BARC
 3. CARE
 4. SEBI

Question Type : MCQ

Question ID : 41652912476

Option 1 ID : 41652948716

Option 2 ID : 41652948717

Option 3 ID : 41652948714

Option 4 ID : 41652948715

Status : Not Answered

Chosen Option : --

Q.4 The Chabahar port being developed by India to gain access to Central Asia is located in which of the following countries ?

- Options
1. Saudi Arabia
 2. Iraq
 3. Oman
 4. Iran

Question Type : MCQ

Question ID : 41652912480

Option 1 ID : 41652948731

Option 2 ID : 41652948730

Option 3 ID : 41652948732

Option 4 ID : 41652948733

Status : Not Answered

Chosen Option : --

Q.5 The foundation of modern education system in India was laid by :

Options

1. The Hunter Commission of 1882
2. Wood's Despatch of 1854
3. Macaulay's Minutes of 1835
4. The Charter Act of 1813

Question Type : MCQ
Question ID : 41652912487
Option 1 ID : 41652948761
Option 2 ID : 41652948759
Option 3 ID : 41652948758
Option 4 ID : 41652948760
Status : Not Answered
Chosen Option : --

Q.6 Where is the world's highest altitude post office located ?

- Options
1. Sikkim
 2. Bern
 3. Port Lockroy
 4. New Hampshire

Question Type : MCQ
Question ID : 41652912485
Option 1 ID : 41652948750
Option 2 ID : 41652948752
Option 3 ID : 41652948751
Option 4 ID : 41652948753
Status : Not Answered
Chosen Option : --

Q.7 Which of the following is not mode of online money transfer in India through online banking ?

- Options
1. IMPS
 2. RTGS
 3. IFSC
 4. NEFT

Question Type : MCQ
Question ID : 41652912471
Option 1 ID : 41652948696
Option 2 ID : 41652948695
Option 3 ID : 41652948697
Option 4 ID : 41652948694
Status : Answered
Chosen Option : 2

Q.8 The first Indian I.T. Company to reach 100 billion dollar market capitalization is :

- Options
1. TCS
 2. Cognizant

3. Infosys

4. Wipro

Question Type : MCQ

Question ID : 41652912478

Option 1 ID : 41652948723

Option 2 ID : 41652948725

Option 3 ID : 41652948722

Option 4 ID : 41652948724

Status : Answered

Chosen Option : 1

Q.9 The Person behind a wonderful concept 'Van Mahotsav' :

Options 1. A.K. Munshi

2. K.M. Munshi

3. A.K. Simha

4. K.M. Upadhaya

Question Type : MCQ

Question ID : 41652912470

Option 1 ID : 41652948692

Option 2 ID : 41652948693

Option 3 ID : 41652948691

Option 4 ID : 41652948690

Status : Answered

Chosen Option : 2

Q.10 The term 'double fault' is associated with :

Options 1. Squash

2. Long Jump

3. Tennis

4. Rugby

Question Type : MCQ

Question ID : 41652912467

Option 1 ID : 41652948678

Option 2 ID : 41652948681

Option 3 ID : 41652948680

Option 4 ID : 41652948679

Status : Not Answered

Chosen Option : --

Q.11 Which one of the following waves/rays are used in common T.V. Remote control ?

Options 1. Infrared

2. Ultrasonic

3. Laser

4. Radio waves

Question Type : MCQ
Question ID : 41652912483
Option 1 ID : 41652948744
Option 2 ID : 41652948745
Option 3 ID : 41652948743
Option 4 ID : 41652948742
Status : Answered
Chosen Option : 1

Q.12 Who among the following heads GST council in India ?

- Options
1. The Trade Minister
 2. The Commerce Minister
 3. The Prime Minister
 4. The Finance Minister

Question Type : MCQ
Question ID : 41652912481
Option 1 ID : 41652948736
Option 2 ID : 41652948737
Option 3 ID : 41652948734
Option 4 ID : 41652948735
Status : Answered
Chosen Option : 4

Q.13 Consider the following statements regarding ocean currents.

- (1) The heat fishing grounds of the world exist mainly in the mixing zones of warm and cold ocean current
 - (2) Gravity is one of factor influencing ocean currents
- Identify the correct statements :

- Options
1. (2) only
 2. (1) only
 3. Both (1) and (2) are incorrect
 4. Both (1) and (2) are correct

Question Type : MCQ
Question ID : 41652912484
Option 1 ID : 41652948747
Option 2 ID : 41652948746
Option 3 ID : 41652948749
Option 4 ID : 41652948748
Status : Answered
Chosen Option : 3

Q.14 For which novel did Indian novelist Aravind Adiga win the prestigious Man Booker Prize ?

- Options
1. The Inheritance of Loss
 2. The White Tiger
 3. The God of Small Things
 4. Midnight's Children

Question Type : **MCQ**
Question ID : **41652912468**
Option 1 ID : **41652948682**
Option 2 ID : **41652948683**
Option 3 ID : **41652948685**
Option 4 ID : **41652948684**
Status : **Not Answered**
Chosen Option : --

Q.15 The New institution that is now playing the role akin to erst while planning commission of India is :

- Options
1. NITI Aayog
 2. Strategic Policy Group
 3. Swacch Bharath Mission
 4. National Security Council

Question Type : **MCQ**
Question ID : **41652912463**
Option 1 ID : **41652948662**
Option 2 ID : **41652948664**
Option 3 ID : **41652948663**
Option 4 ID : **41652948665**
Status : **Answered**
Chosen Option : **3**

Q.16 The train accident that killed 61 people watching Dussera Celebrations in 2018 happened at which place :

- Options
1. Chennai
 2. Patiala
 3. Bangalore
 4. Amritsar

Question Type : **MCQ**
Question ID : **41652912475**
Option 1 ID : **41652948712**
Option 2 ID : **41652948711**
Option 3 ID : **41652948713**
Option 4 ID : **41652948710**
Status : **Answered**
Chosen Option : **2**

Q.17 India and which country have agreed to undertake the Indus Water Treaty tours in the Indus basin on both sides to resolve issues on the various hydroelectric projects ?

- Options
1. China
 2. Pakistan
 3. Bangladesh
 4. Afghanistan

Question Type : **MCQ**

Question ID : **41652912464**
Option 1 ID : **41652948668**
Option 2 ID : **41652948667**
Option 3 ID : **41652948669**
Option 4 ID : **41652948666**
Status : **Answered**
Chosen Option : **2**

Q.18 What is the full form of NPCI ?

- Options
1. Nano Center for Political Integration
 2. National Council Process Interaction
 3. National Payments Corporation of India
 4. National Public Control of India

Question Type : **MCQ**
Question ID : **41652912474**
Option 1 ID : **41652948706**
Option 2 ID : **41652948708**
Option 3 ID : **41652948707**
Option 4 ID : **41652948709**
Status : **Not Answered**
Chosen Option : **--**

Q.19 The CRR in banking parlance means the following :

- Options
1. Current Reserve Ratio
 2. Cash Reserve Ratio
 3. Corporate Reserve Ratio
 4. Custom Reserve Ratio

Question Type : **MCQ**
Question ID : **41652912479**
Option 1 ID : **41652948726**
Option 2 ID : **41652948727**
Option 3 ID : **41652948729**
Option 4 ID : **41652948728**
Status : **Answered**
Chosen Option : **1**

Q.20 Consider the following statements regarding HEATING AND COOLING OF ATMOSPHERE :

- (1) Convection is important in heating the lower layers of the atmosphere.
- (2) The convection transfer of energy is confined only to the troposphere.
- (3) 'loo' is the outcome of advection process.

Identify the correct statements :

- Options
1. (2) and (3) only
 2. All (1), (2) and (3) are incorrect
 3. All (1), (2) and (3) are correct
 4. (1) and (2) only

Question Type : MCQ
Question ID : 41652912486
Option 1 ID : 41652948755
Option 2 ID : 41652948757
Option 3 ID : 41652948756
Option 4 ID : 41652948754
Status : Answered
Chosen Option : 1

Q.21 Who among the following is not conferred Bharath Ratna ?

- Options
1. Atal Bihari Vajpayee
 2. Nelson Mandela
 3. Sachin Tendulkar
 4. Kapil Dev

Question Type : MCQ
Question ID : 41652912472
Option 1 ID : 41652948699
Option 2 ID : 41652948700
Option 3 ID : 41652948698
Option 4 ID : 41652948701
Status : Answered
Chosen Option : 2

Q.22 Which of the following countries is not a member of SAARC ?

- Options
1. Bhutan
 2. Myanmar
 3. Maldives
 4. Afghanistan

Question Type : MCQ
Question ID : 41652912466
Option 1 ID : 41652948675
Option 2 ID : 41652948677
Option 3 ID : 41652948676
Option 4 ID : 41652948674
Status : Answered
Chosen Option : 3

Q.23 The major nation that announced the withdrawal from Paris climate change accord in 2017 was :

- Options
1. Spain
 2. Germany
 3. Sri Lanka
 4. United States of America

Question Type : MCQ
Question ID : 41652912473
Option 1 ID : 41652948702

Option 2 ID : **41652948705**
Option 3 ID : **41652948704**
Option 4 ID : **41652948703**
Status : **Not Answered**
Chosen Option : --

Q.24 Who among the following is NOT associated with billiards in India ?

- Options
1. Subash Agarwal
 2. Manoj Kothari
 3. Mihir Sen
 4. Ashok Shandilya

Question Type : **MCQ**
Question ID : **41652912477**
Option 1 ID : **41652948721**
Option 2 ID : **41652948718**
Option 3 ID : **41652948719**
Option 4 ID : **41652948720**
Status : **Not Answered**
Chosen Option : --

Q.25 The responsibilities of establishing and maintaining astound and efficient Accounting and Financial Reporting system in India is vested in the hands of :

- Options
1. RBI
 2. The Comptroller General of Accounts
 3. NITI AYOOG
 4. Finance Ministry

Question Type : **MCQ**
Question ID : **41652912482**
Option 1 ID : **41652948738**
Option 2 ID : **41652948739**
Option 3 ID : **41652948740**
Option 4 ID : **41652948741**
Status : **Answered**
Chosen Option : **1**