








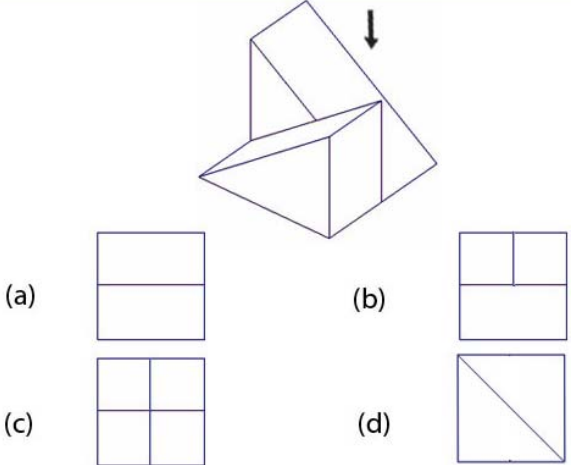


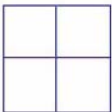

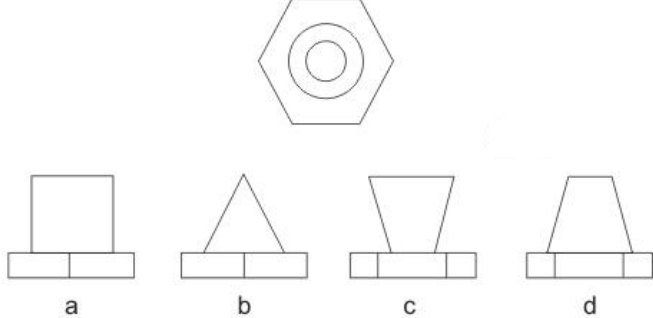
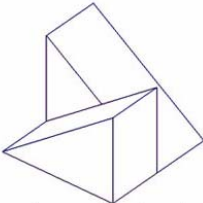


NATA Mock Test No.: 4

Total marks: - 40

Time: - 1 hrs.

1.	<p>Natural granite stone texture is ?</p> <p>a) Rough b) Smooth c) Shiny d) Non Skid</p>
2.	<div style="display: flex; justify-content: space-around; align-items: center;"> <div style="text-align: center;">  (1) </div> <div style="text-align: center;">  (2) </div> <div style="text-align: center;">  (3) </div> <div style="text-align: center;">  (4) </div> </div> <div style="display: flex; justify-content: space-around; align-items: center; margin-top: 20px;"> <div style="text-align: center;">  a </div> <div style="text-align: center;">  b </div> <div style="text-align: center;">  c </div> <div style="text-align: center;">  d </div> </div> <p>Identify the correct figure which can replace the question mark from the given choices</p> <p>a) a b) b c) c d) d e)</p>
3.	<p>The texture of a handrail on a staircase would be</p> <p>a) Leathery b) Soft c) Smooth d) Matt</p>
4.	<p>King: Royal: :Saint:</p> <p>a) Priesthood b) Religious c) Prayer d) Holy book</p>
5.	<p>Efficacy means</p> <p>a) Efficient b) Compatibility c) Incompetence d) Bright</p>
6.	 <p>This is</p> <p>a) Stone is wall in Plan b) Stone wall in elevation</p> <p>c) Brick wall in plan d) Wooden wall</p>
7.	<p>Opprobrium means</p> <p>a) Adulation b) Flattery c) Disgrace d) Sweet Talk</p>

<p>8.</p>	 <p>(a)  (b) </p> <p>(c)  (d) </p> <p>a) a b) b c) c d) d</p>
<p>9.</p>	<p>The Antonym of durable</p> <p>a) Constant b) Dependable c) Perishable d) Delicate</p>
<p>10.</p>	 <p>Identify the elevation of the given problem figure, from the answer figures given below</p> <p>a) A b) B c) C d) D</p>
<p>11.</p>	<p>The external plaster of a building would be</p> <p>a) Undulating b) Smooth c) Spongy d) Rough</p>
<p>12.</p>	<p>Brass is a mixture of</p> <p>a) Copper and Steel b) Copper and Zinc</p> <p>c) Zinc and Tin d) Copper with high lead content</p>
<p>13.</p>	 <p>Count the number of vertices</p> <p>(a) 10 (b) 11</p> <p>(c) 5 (d) 7</p> <p>a) A b) B c) C d) D</p>

14.

(a) (b)

(c) (d)

a) A b) B c) C d) D

15.

(a) (b)

(c) (d)

a) A b) B c) C d) D

16.

Count the number of vertices ?

(a) 3 (b) 5

(c) 7 (d) 6

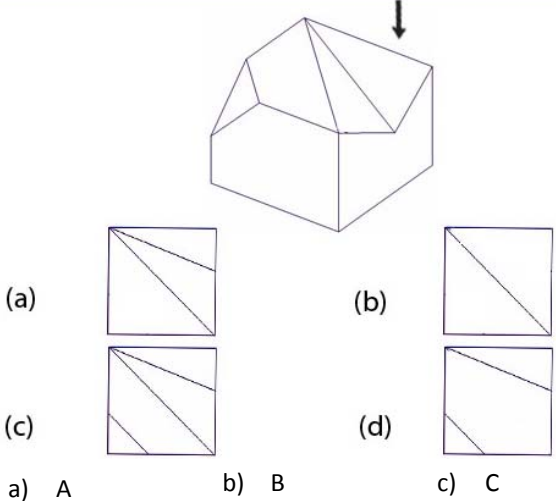




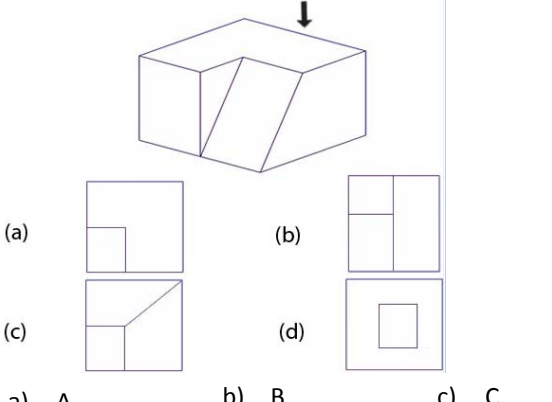
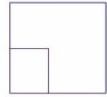

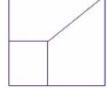

a) 3 b) 5 c) 7 d) 6

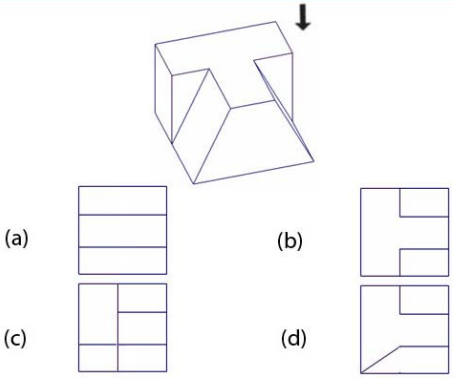




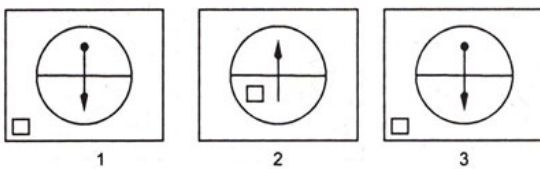
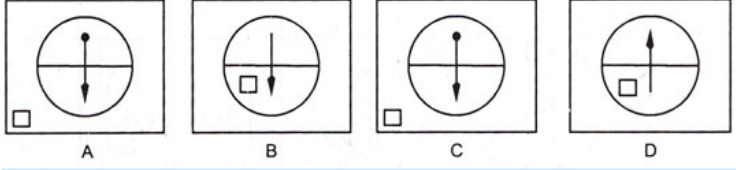

17.

Identify the Mounment

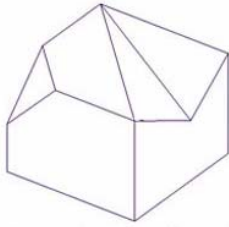
a) Shive Temple kanchipuram b) Udupi Temple

c) Konark Sun Temple d) Kandariya Mahadeo Temple, Khajuraho

18.	<p>0.0007 = ?</p> <p>a) 7% b) 0.7% c) 0.07% d) 0.007%</p>
19.	<p>Hidden is the same as</p> <p>a) Concealed b) Open c) Unmasked d) Opaque</p>
20.	 <p>(a)  (b) </p> <p>(c)  (d) </p> <p>a) A b) B c) C d) D</p>
21.	<p>Two walls have the same height and length of 100 cm and 50 cm respectively, if one is 30 cm thick and the other is 25 cm thick what is the difference in volume between the walls?</p> <p>a) 0.25 cubic meter b) 0.025 cubic meter</p> <p>c) 50 cubic meter d) 5 cubic meter</p>
22.	<p>The Highest award for Architecture is</p> <p>a) Pritzker prize b) Booker Prize</p> <p>c) Megasawsay Prize d) Nobel Prize</p>
23.	 <p>(a)  (b) </p> <p>(c)  (d) </p> <p>a) A b) B c) C d) D</p>

<p>24.</p>	 <p>(a)  (b) </p> <p>(c)  (d) </p> <p>a) A b) B c) C d) D</p>
<p>25.</p>	<p>Identify the material</p> <p>a) Granite b) Sand c) Jute fabric d) Stucco Plaster</p>
<p>26.</p>	<p>Problem Figures</p>  <p>1 2 3</p> <p>Answer Figures</p>  <p>A B C D</p> <p>Identify the fourth figure from the given answer figures</p> <p>a) A b) B c) C d) D</p>
<p>27.</p>	<p>The closest meaning to the word outdated is.....</p> <p>a) Recent b) In Fashion c) Perishable d) Ancient</p>
<p>28.</p>	 <p>Identify the Mounment</p> <p>a) Kailash Temple. Ellora b) Konarj Sun Temple</p> <p>c) Kandariya Mahadeo Temple, Khajuraho d) Mukteshwar Temple</p>

29.



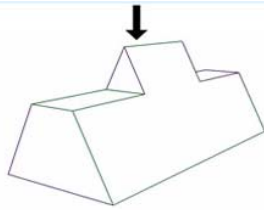
Count the number of horizontal surfaces ?

(a) 3 (b) 2

(c) 4 (d) 6

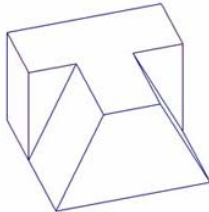
a) A b) B c) C d) D

30.



a) A b) B c) C d) D

31.



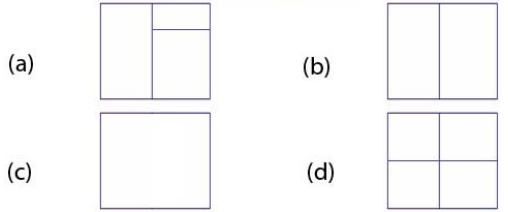
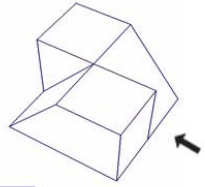
Count the number of vertical edges ?

(a) 7 (b) 4

(c) 5 (d) 2

a) A b) B c) C d) D

32.




a) A b) B c) C d) D

33.

If a right angled Isosceles Triangle has its equal sides as 10 units what is the largest square that can be fit into it?

- a) 5 sq units b) 25 sq units c) 100 sq units d) 50 sq units

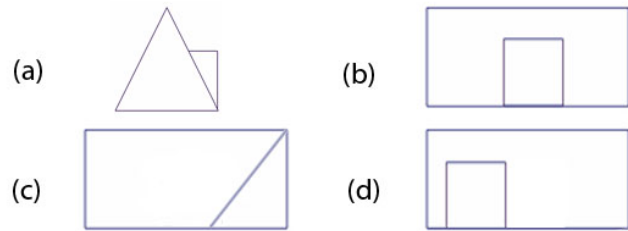
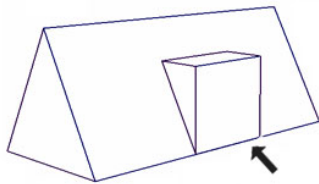
34.



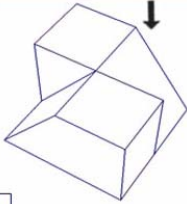


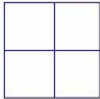

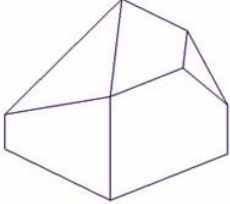
Identify the Building

- a) Buddhist Monastery b) Institute of Science, Indore
c) Nepalese Pagoda d) Japanese Pagoda

35.



a) A b) B c) C d) D

36.	<p>If a cube of sides 8 cm is melted and cubes of sides 4 cm are made, How many cubes will you get ?</p> <p>a) 4 b) 8 c) 2 d) 16</p>
37.	 <p>(a)  (b) </p> <p>(c)  (d) </p> <p>a) A b) B c) C d) D</p>
38.	<p>Loud: Stentorian :: Bright:</p> <p>a) Dreary b) Dusky c) Gloomy d) Radiant</p>
39.	 <p>Count the number of triangular surfaces ?</p> <p>(a) 6 (b) 4</p> <p>(c) 1 (d) 2</p> <p>a) A b) B c) C d) D</p>
40.	<p>wax: Candle :: ? : Paper</p> <p>a) Tree b) Bamboo c) Pilp d) Wood</p>